

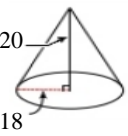




1)  Find perimeter of square having each side (s) equals 64 in Answer: _____	2) Round 16.37602692 to 4 significant figures. Answer: _____	3) $\frac{8}{12} \times \frac{10}{2}$ Answer: _____
4) Find the value of 'q' by completing the square of the following equation: $2 + 6q + 9$ Answer: _____	5) Round 12.6060447 to 3 significant figures. Answer: _____	6)  Find perimeter of square having each side (s) equals 64 in Answer: _____
7) $(-60) \div (-10)$ Answer: _____	8) $(-16) + (-88)$ Answer: _____	9) $20\frac{1}{2} - 11\frac{1}{9}$ Answer: _____
10) A number was shared in the ratio 3:9. The larger share was 33. What was the smaller amount? Answer: _____	11) $14 + 2$ Answer: _____	12) $18\frac{1}{6} - 1\frac{1}{9}$ Answer: _____
13)  Volume of Cone Answer: _____	14) $31.54 \div 3.8$ Answer: _____	15) Find the mode of the following set of data: 49, 49, 49, 49, 49, 49, 49, 50, 50, 50, 50, 50, 50, 32, 32, 32, 32, 32 Answer: _____

Name: _____

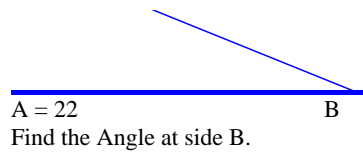
May 05, 2024



16) $29 + 5$

Answer: _____

17)

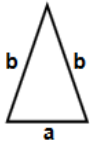


Answer: _____

18) $15/8 \times 6/8$

Answer: _____

19)



Find area of
triangle
 $a = 40$ in, $b = 57$ in

Answer: _____

20) Find the value of 's' by completing
the square of the following equation:
 $s^2 + 12s + 20$

Answer: _____

Total: ___ / 20

Name: _____

Sr: 05052024-3635

May 05, 2024

MATHS WORKSHEET
GENERATOR



11-PLUS
SATS
GCSES



Answers:

- | | | | | | | |
|----------|-------------------|-------------------|----------------------|-----------------------|----------------------|---------|
| 1) 256in | 2) 16.38 | 3) $3\frac{1}{3}$ | 4) $(q + 3)^2$ | 5) 12.6 | 6) 256in | 7) 6 |
| 8) -104 | 9) $8\frac{7}{9}$ | 10) 11 | 11) 16 | 12) 2^0_1 | 13) 6785.840131754 | 14) 8.3 |
| 15) 49 | 16) 34 | 17) 158 | 18) $1\frac{13}{32}$ | 19) 692.82032302755in | 20) $(s + 6)^2 - 16$ | |